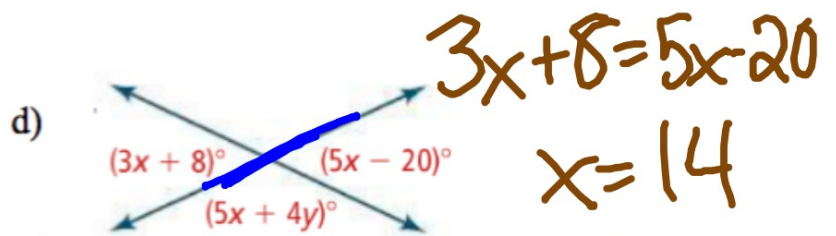
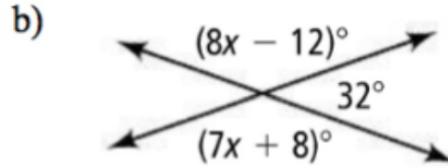
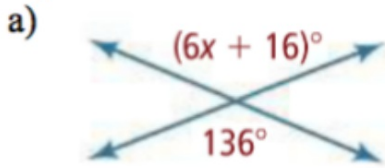


Example 4: Find the value of each variable.



$(5x + 4y) + (5x - 20) = 180$   
 $5(14) + 4y + 5(14) - 20 = 180$

